

Students graph a linear equation and compute the x- and y- intercepts (e.g., graph $2x + 6y = 4$). 1A6.0

167. What is the y-intercept of the line $2x - 3y = 12$?

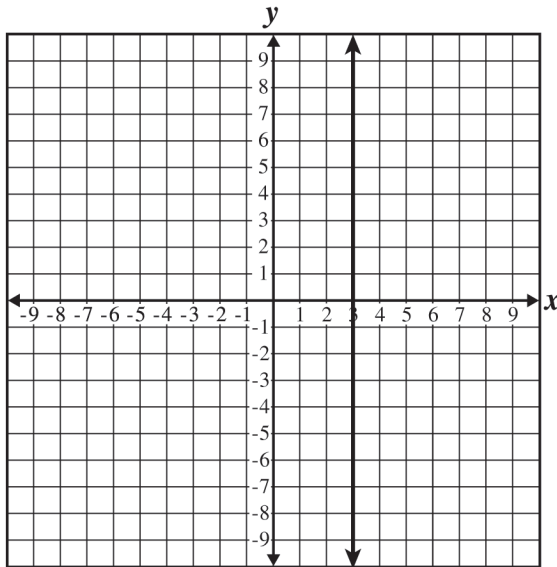
- A (0, -4)
- B (0, -3)
- C (2, 0)
- D (6, 0)

168. What are the coordinates of the x-intercept of the line $3x + 4y = 12$?

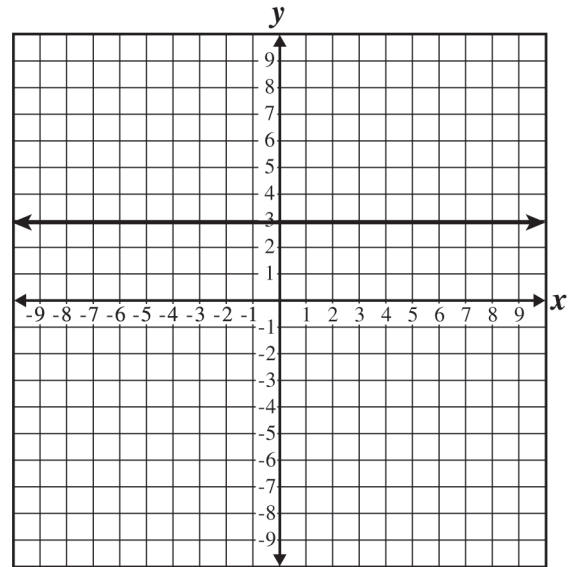
- A (0, 3)
- B (3, 0)
- C (0, 4)
- D (4, 0)

169. What is the graph of the equation $x = 3$?

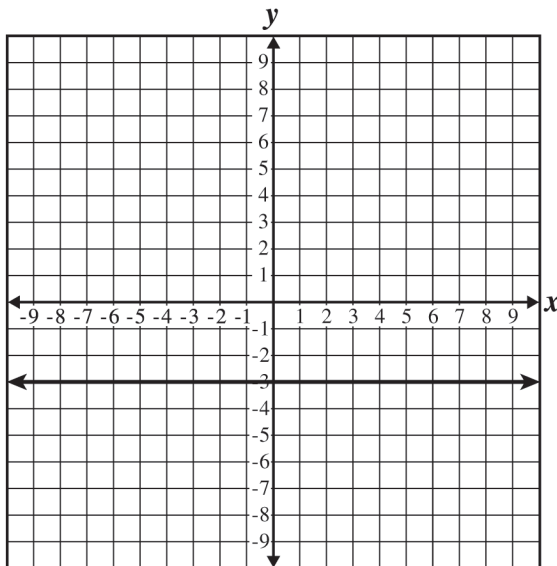
A



C



B



D

